

Name:

Klasse:

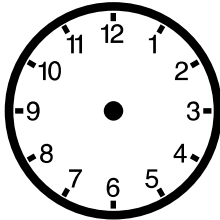
Datum:

Uhrzeit

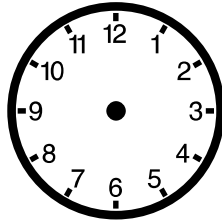
Viel Erfolg!



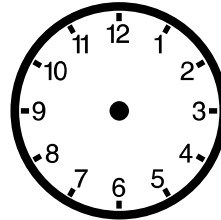
Zeichne die Zeiger passend zur Uhrzeit in die Uhren ein.



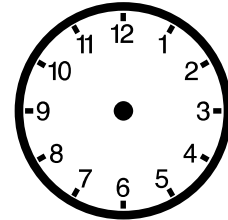
2:00 Uhr



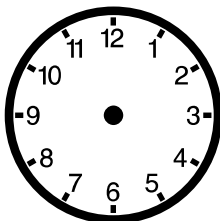
19:00 Uhr



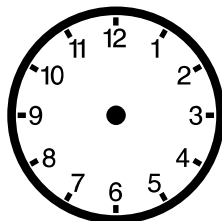
16:00 Uhr



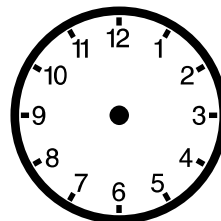
5:00 Uhr



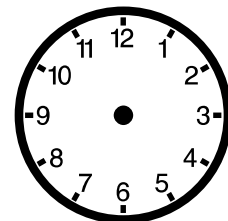
21:00 Uhr



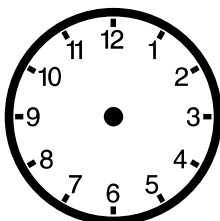
1:00 Uhr



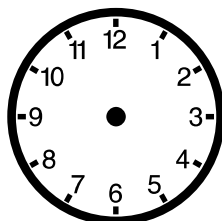
15:00 Uhr



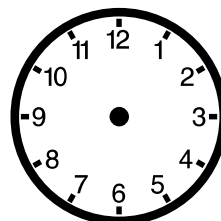
23:00 Uhr



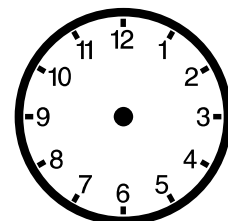
6:00 Uhr



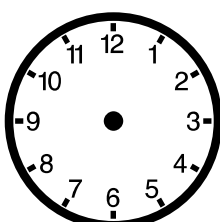
18:00 Uhr



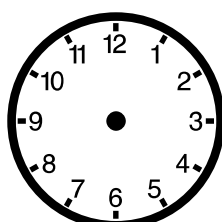
8:00 Uhr



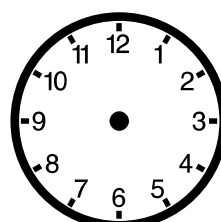
4:00 Uhr



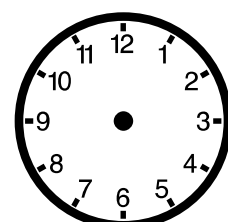
3:00 Uhr



17:00 Uhr



10:00 Uhr



7:00 Uhr

Name:

Klasse:

Datum:


Lösung

Uhrzeit

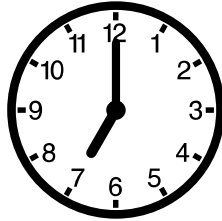
Viel Erfolg!




Zeichne die Zeiger passend zur Uhrzeit in die Uhren ein.




2:00 Uhr




19:00 Uhr




16:00 Uhr




5:00 Uhr




21:00 Uhr




1:00 Uhr




15:00 Uhr




23:00 Uhr




6:00 Uhr




18:00 Uhr




8:00 Uhr




4:00 Uhr




3:00 Uhr



17:00 Uhr



10:00 Uhr



7:00 Uhr