

Name:


Klasse:

Datum:


Uhrzeit

Trage die Uhrzeiten in beiden Schreibweisen ein.


Wie spät ist es?




2:00 Uhr
14:00 Uhr




_____ Uhr
_____ Uhr




_____ Uhr
_____ Uhr




_____ Uhr
_____ Uhr




_____ Uhr
_____ Uhr




_____ Uhr
_____ Uhr




_____ Uhr
_____ Uhr




_____ Uhr
_____ Uhr




_____ Uhr
_____ Uhr




_____ Uhr
_____ Uhr




_____ Uhr
_____ Uhr




_____ Uhr
_____ Uhr




_____ Uhr
_____ Uhr



_____ Uhr
_____ Uhr



_____ Uhr
_____ Uhr



_____ Uhr
_____ Uhr

Name:

Klasse:


Datum:

Lösung


Uhrzeit

Trage die Uhrzeiten in beiden Schreibweisen ein.


Wie spät ist es?



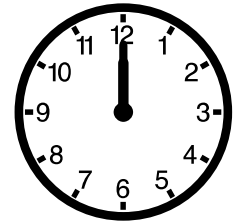
2:00 Uhr
14:00 Uhr




6:00 Uhr
18:00 Uhr



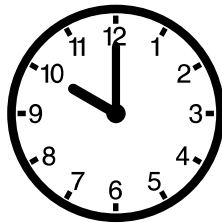
8:00 Uhr
20:00 Uhr




12:00 Uhr
24:00 Uhr




4:00 Uhr
16:00 Uhr




10:00 Uhr
22:00 Uhr




2:00 Uhr
14:00 Uhr




3:00 Uhr
15:00 Uhr




11:00 Uhr
23:00 Uhr




6:00 Uhr
18:00 Uhr




9:00 Uhr
21:00 Uhr




7:00 Uhr
19:00 Uhr




1:00 Uhr
13:00 Uhr



8:00 Uhr
20:00 Uhr



3:00 Uhr
15:00 Uhr



11:00 Uhr
23:00 Uhr